


Name(s): _____

Does This Make "Cents"?


Are you savvy with money? Solve three money problems to get Tic-Tac-Math!




What is the total amount of money shown?



What is the total amount of money shown?



What is the total amount of money shown?



What is the total value of one \$5.00 bill, two \$1.00 bills, 3 quarters, and a nickel?

What is the total value of one \$10 bill, two \$5.00 bills, and 6 quarters?

Say you pay for a \$1.50 item with \$2.00. How much change should you get back?

Say you had one \$5.00 bill, two \$1.00 bills, one quarter, and one dime. If you spend \$2.15 cents, how much would you have left?

Say you pay for a \$3.25 item with a \$5.00 bill. How much change should you get back?

Say you pay for an \$11.39 item with a \$20.00 bill. How much change should you get back?

Name(s): _____

Plus or Minus?

Should you add or subtract? You'll have to decide to solve these word problems! Solve three to get Tic-Tac-Math!



Allie earned \$28 mowing lawns. Her brother Sam earned \$19 mowing lawns. How much more did Allie earn than Sam?

Don ate 18 hot dogs at the hot dog-eating contest. Sal ate 6 more hot dogs than Don. How many hot dogs did Sal eat?

Juliana owns 35 comic books. Ernie owns 47 comic books. How many comic books do the two kids own in all?

Yanni weighs 134 pounds. His little sister Adelle weighs 42 pounds less. How much does Adelle weigh?

A 32-inch TV costs \$749. A 27-inch TV costs \$289. How much more does the 32-inch TV cost?

Olga hit a tennis ball against the wall 238 times without missing. Art hit the ball 175 times without missing. How many times did they hit the wall altogether?

Kip's family drove 1,845 miles to Dizzy World. Then they drove 2,762 miles to See World. How many miles did they drive in all?

Ginny has done 4,804 jumping jacks in gym class this year. Glenn has done 3,912. How many more jumping jacks has Ginny done?

Bart read 3,432 pages of books last year! That's 1,544 fewer pages than he read the year before. How many pages did Bart read in the two years combined?